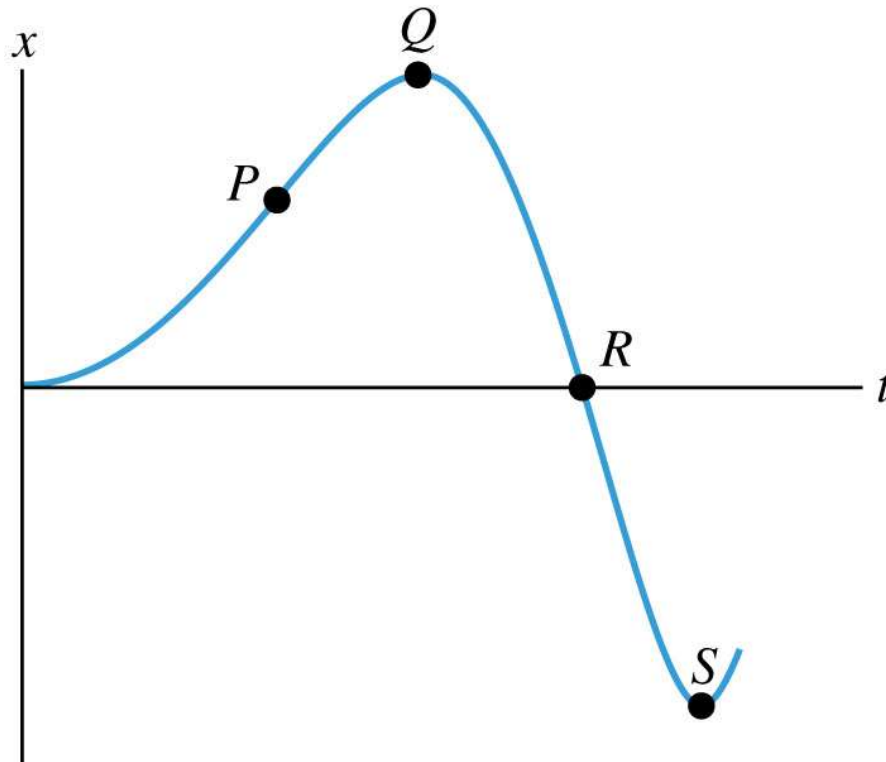


Q2.1

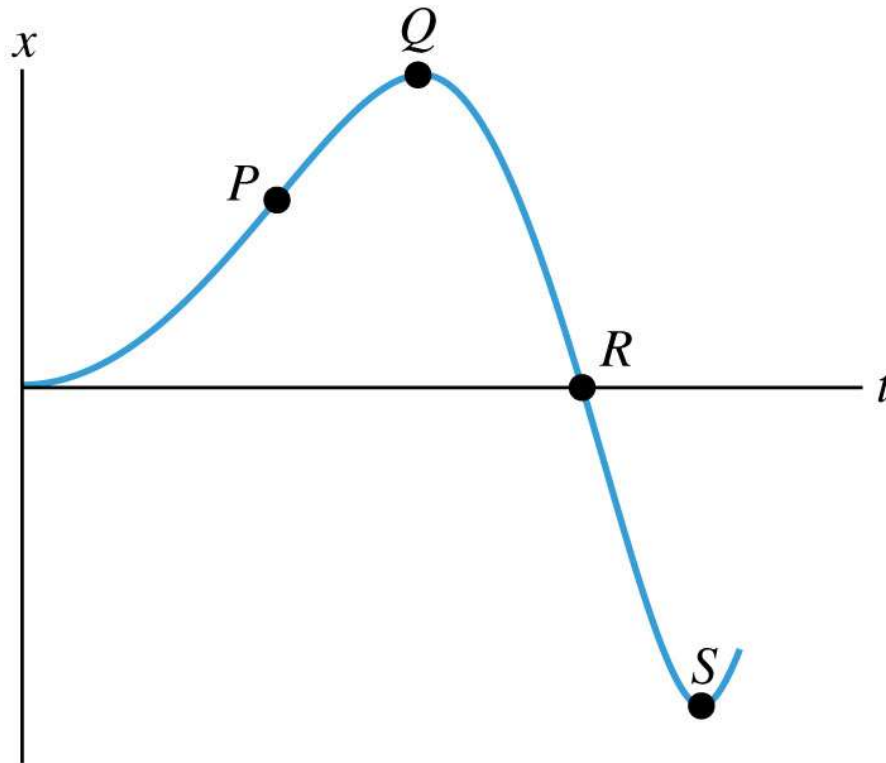


© 2012 Pearson Education, Inc.

This is the $x-t$ graph of the motion of a particle. Of the four points P , Q , R , and S , the velocity v_x is greatest (most positive) at

- A. point P . B. point Q . C. point R . D. point S .
- E. not enough information in the graph to decide

A2.1

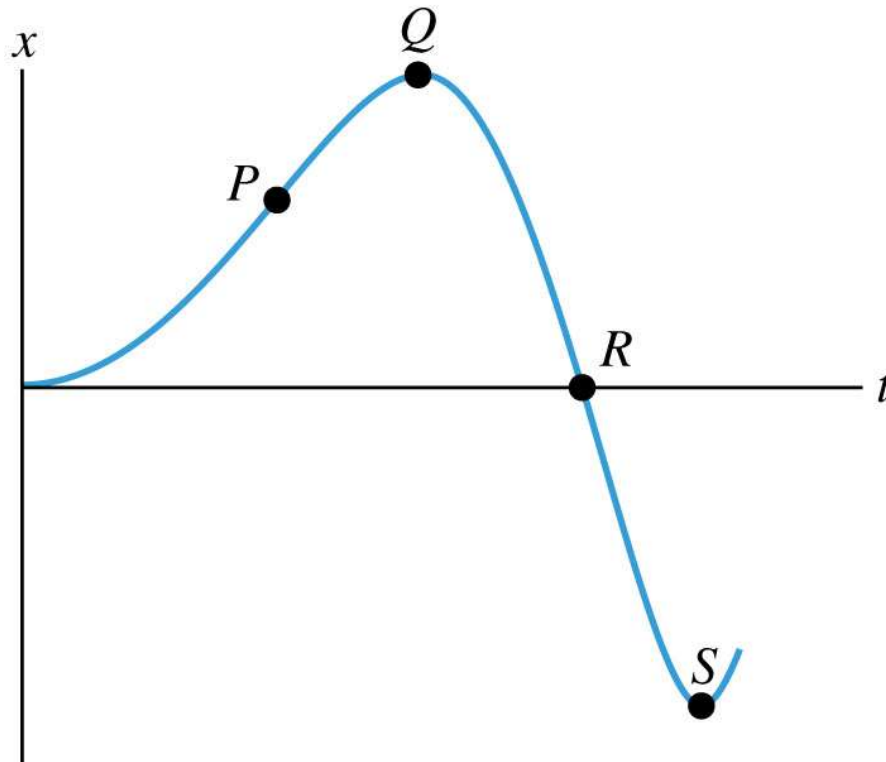


© 2012 Pearson Education, Inc.

This is the $x-t$ graph of the motion of a particle. Of the four points P , Q , R , and S , the velocity v_x is greatest (most positive) at

- ✓ A. point P . B. point Q . C. point R . D. point S .
- E. not enough information in the graph to decide

Q2.2

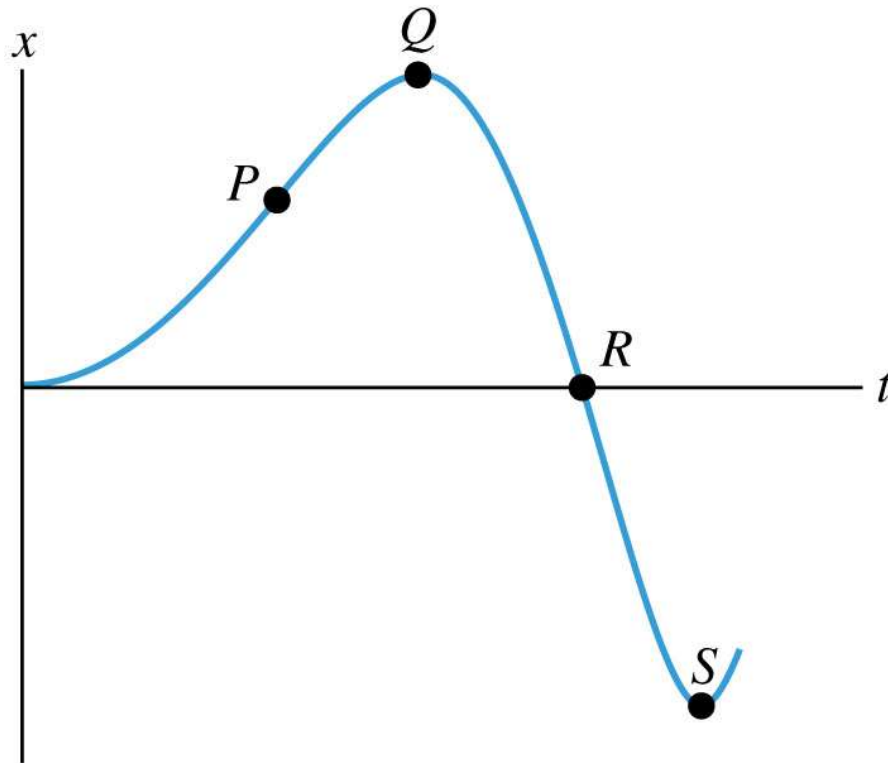


© 2012 Pearson Education, Inc.

This is the $x-t$ graph of the motion of a particle. Of the four points P , Q , R , and S , the speed is greatest at

- A. point P . B. point Q . C. point R . D. point S .
- E. not enough information in the graph to decide

A2.2

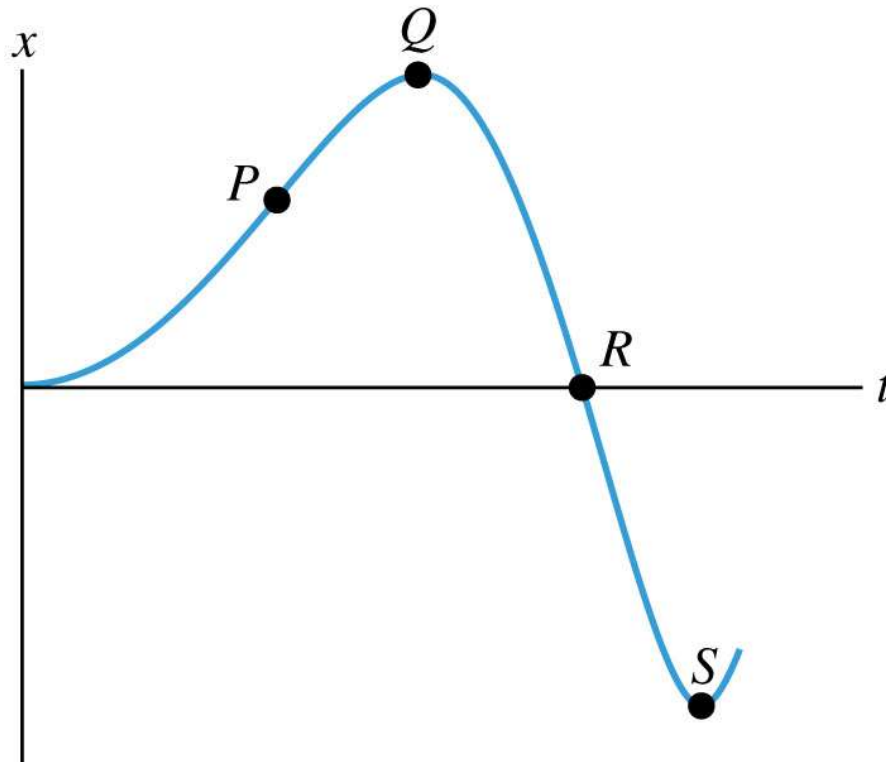


© 2012 Pearson Education, Inc.

This is the $x-t$ graph of the motion of a particle. Of the four points P , Q , R , and S , the speed is greatest at

- A. point P . B. point Q . C. point R . D. point S .
E. not enough information in the graph to decide

Q2.3

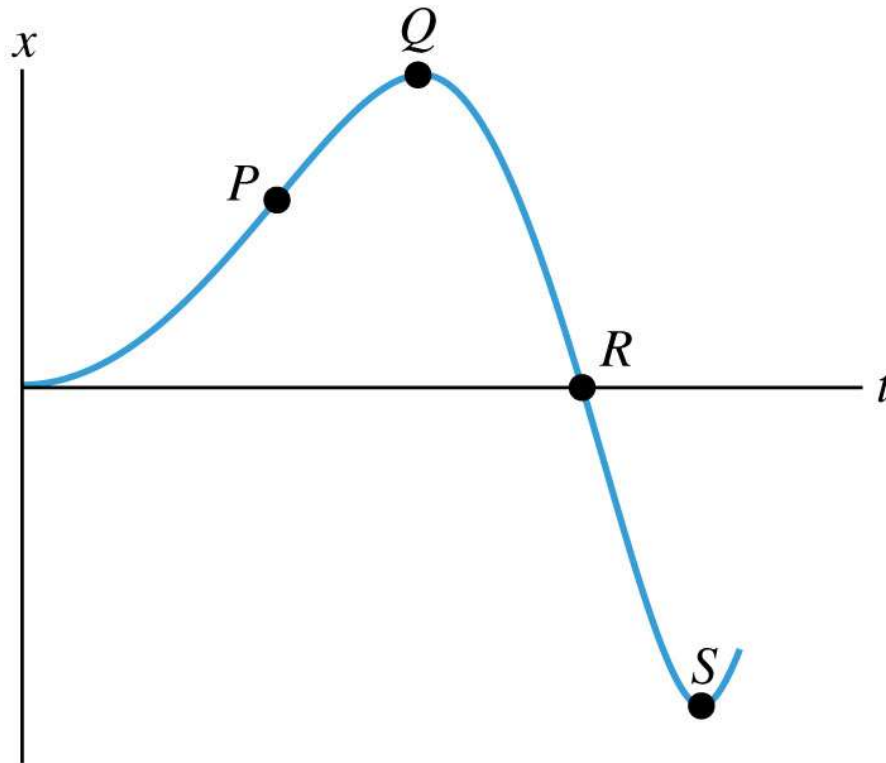


© 2012 Pearson Education, Inc.

This is the $x-t$ graph of the motion of a particle. Of the four points P , Q , R , and S , the acceleration a_x is greatest (most positive) at

- A. point P . B. point Q . C. point R . D. point S .
E. not enough information in the graph to decide

A2.3



© 2012 Pearson Education, Inc.

This is the $x-t$ graph of the motion of a particle. Of the four points P , Q , R , and S , the acceleration a_x is greatest (most positive) at

- A. point P . B. point Q . C. point R . D. point S .
E. not enough information in the graph to decide

Q2.4



You toss a ball straight upward, in the positive direction.
The ball falls freely under the influence of gravity.


At the highest point in the ball's motion,

- A. its velocity is zero and its acceleration is zero.
- B. its velocity is zero and its acceleration is positive (upward).
- C. its velocity is zero and its acceleration is negative (downward).
- D. its velocity is positive (upward) and its acceleration is zero.
- E. its velocity is positive (upward) and its acceleration is zero.

A2.4

You toss a ball straight upward, in the positive direction.
The ball falls freely under the influence of gravity.

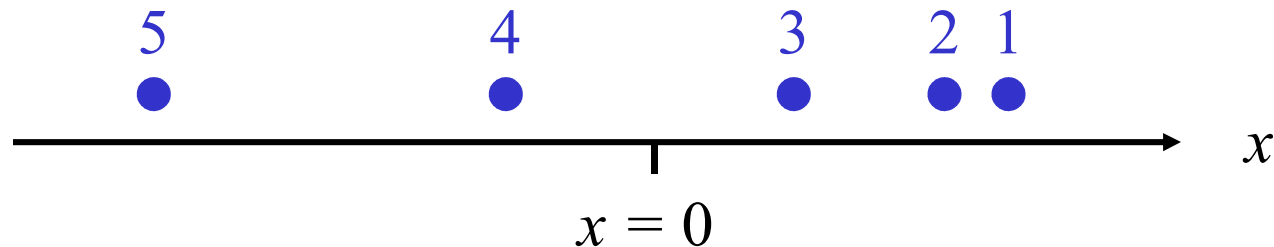
At the highest point in the ball's motion,

- A. its velocity is zero and its acceleration is zero.
- B. its velocity is zero and its acceleration is positive (upward).
-  C. its velocity is zero and its acceleration is negative (downward).
- D. its velocity is positive (upward) and its acceleration is zero.
- E. its velocity is positive (upward) and its acceleration is zero.

Q2.5



This is a motion diagram of an object moving along the x -direction with constant acceleration. The dots 1, 2, 3, ... show the position of the object at equal time intervals Δt .



At the time labeled 3, what are the signs of the object's velocity v_x and acceleration a_x ?

A. $v_x < 0, a_x = 0$

B. $v_x < 0, a_x > 0$

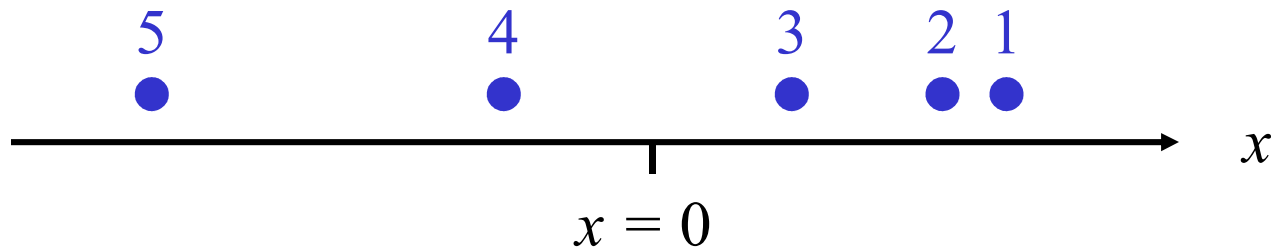
C. $v_x < 0, a_x < 0$

D. $v_x > 0, a_x > 0$

E. $v_x > 0, a_x < 0$

A2.5

This is a motion diagram of an object moving along the x -direction with constant acceleration. The dots 1, 2, 3, ... show the position of the object at equal time intervals Δt .



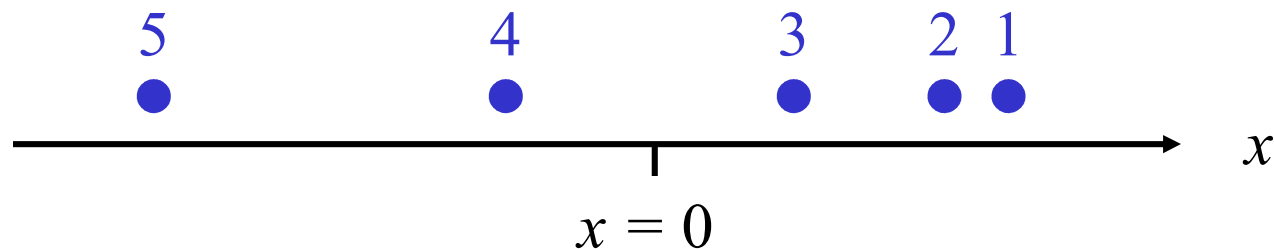
At the time labeled 3, what are the signs of the object's velocity v_x and acceleration a_x ?

- A. $v_x < 0, a_x = 0$
- B. $v_x < 0, a_x > 0$
- C. $v_x < 0, a_x < 0$
- D. $v_x > 0, a_x > 0$
- E. $v_x > 0, a_x < 0$

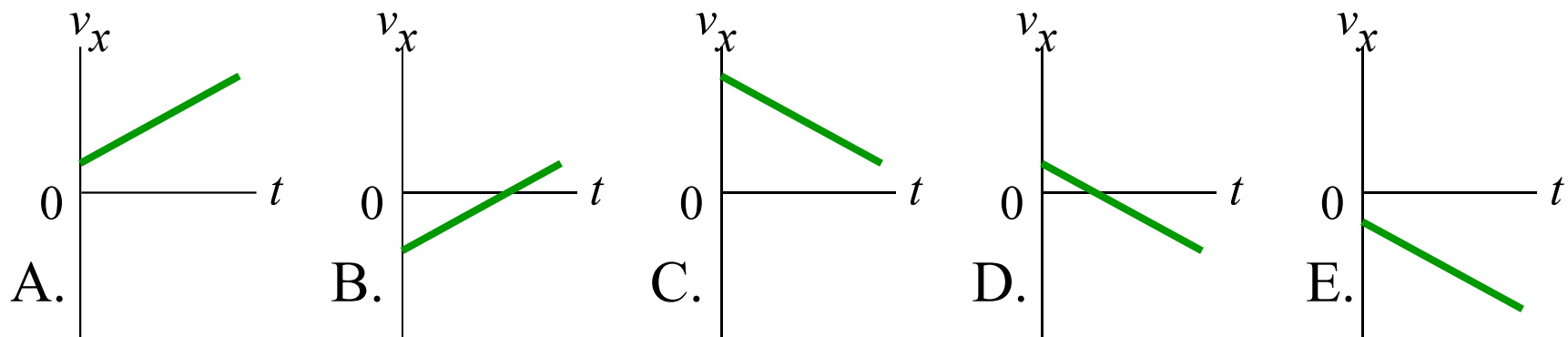
Q2.6



This is a motion diagram of an object moving along the x -direction with constant acceleration. The dots 1, 2, 3, ... show the position of the object at equal time intervals Δt .

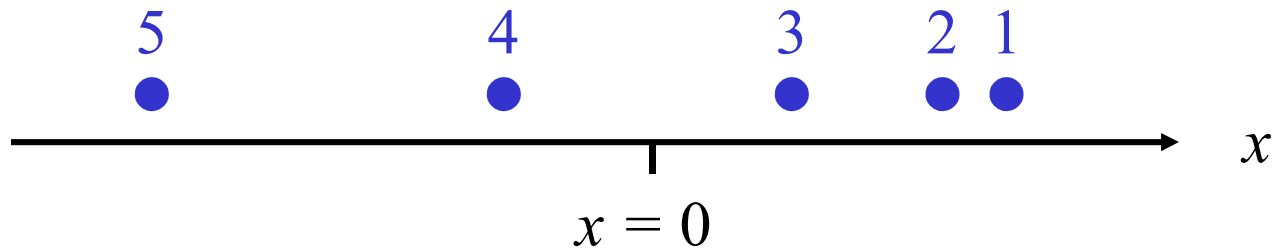


Which of the following v_x - t graphs best matches the motion shown in the motion diagram?

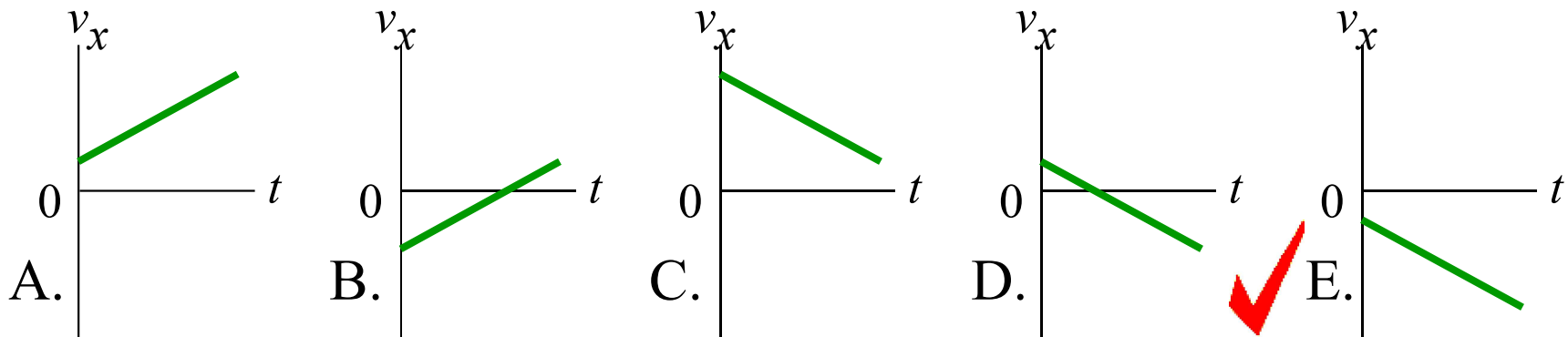


A2.6

This is a motion diagram of an object moving along the x -direction with constant acceleration. The dots 1, 2, 3, ... show the position of the object at equal time intervals Δt .



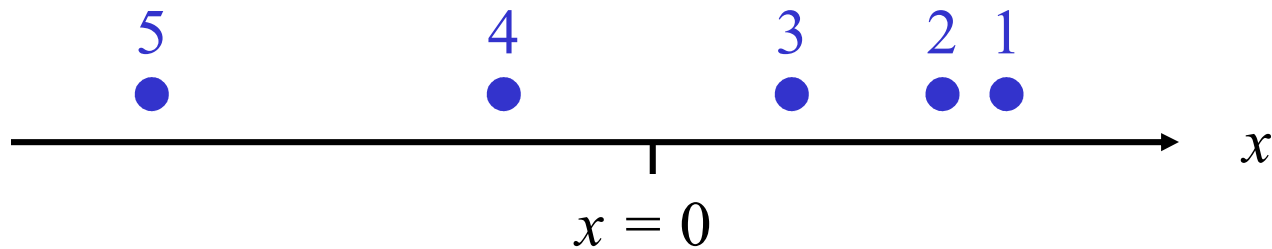
Which of the following v_x - t graphs best matches the motion shown in the motion diagram?



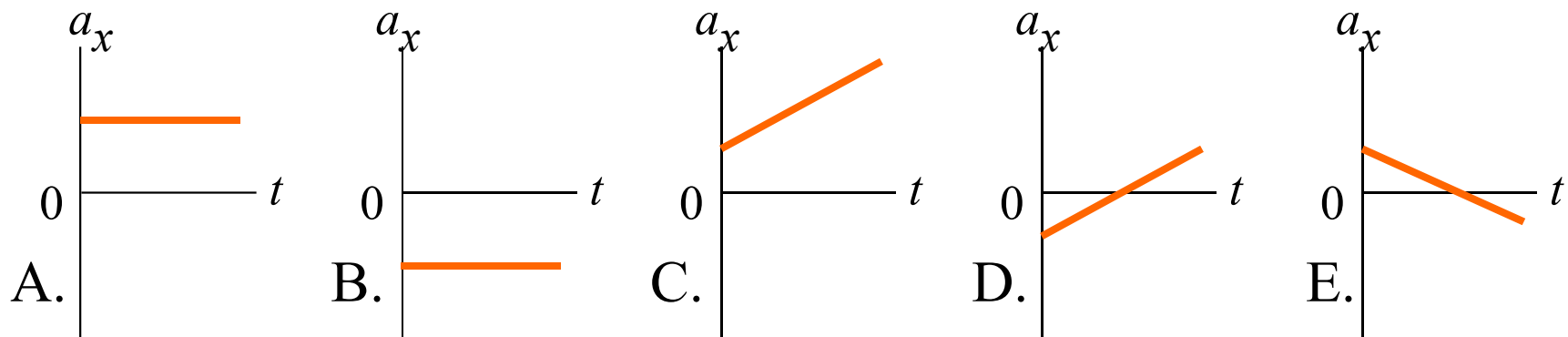
Q2.7



This is a motion diagram of an object moving along the x -direction with constant acceleration. The dots 1, 2, 3, ... show the position of the object at equal time intervals Δt .

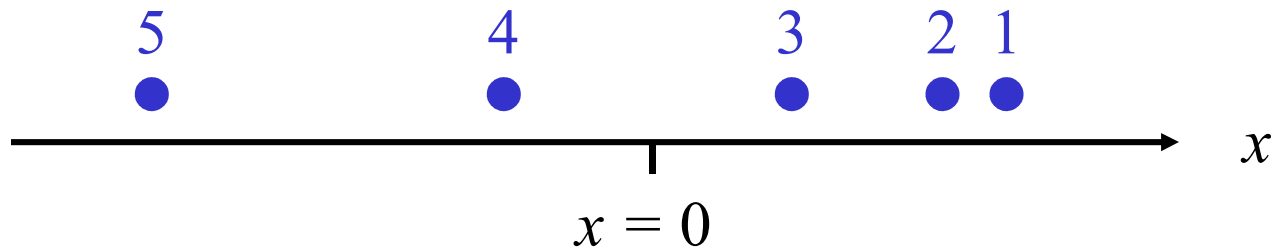


Which of the following a_x-t graphs best matches the motion shown in the motion diagram?

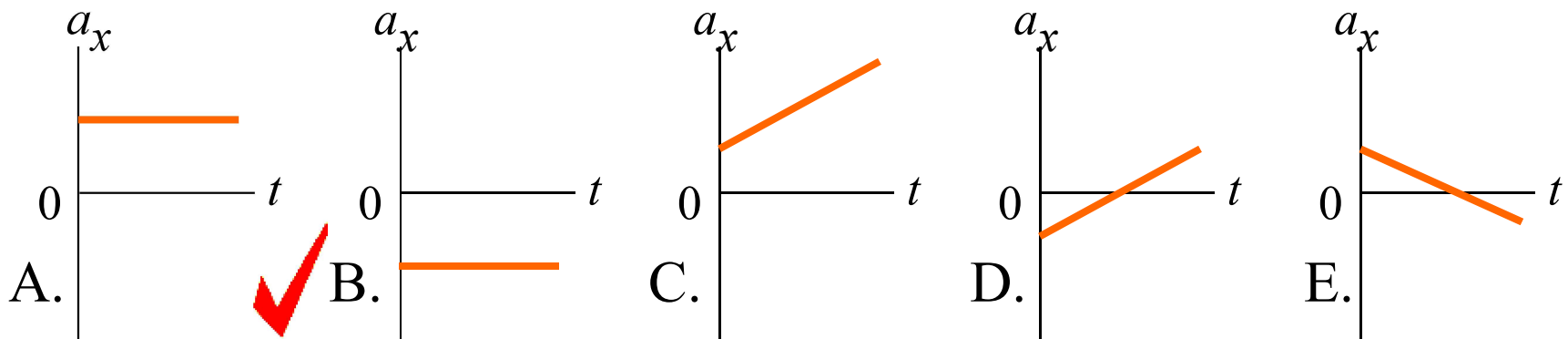


A2.7

This is a motion diagram of an object moving along the x -direction with constant acceleration. The dots 1, 2, 3, ... show the position of the object at equal time intervals Δt .



Which of the following a_x-t graphs best matches the motion shown in the motion diagram?

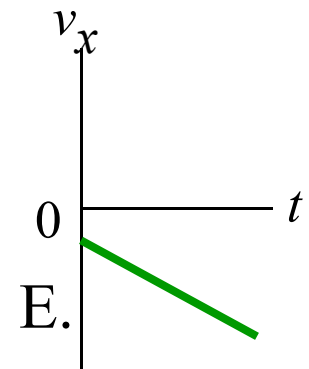
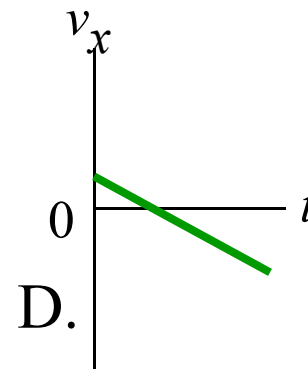
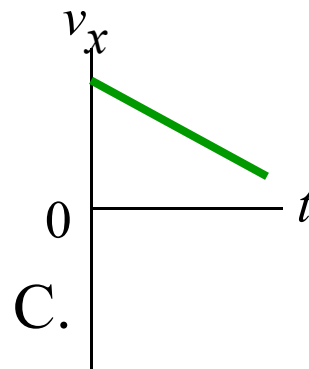
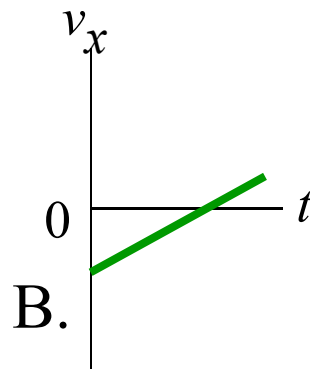
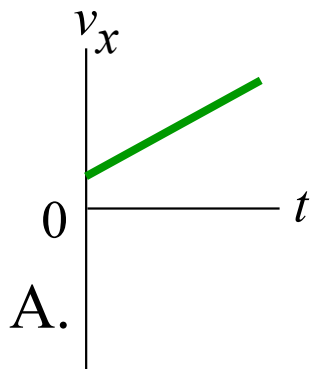


Q2.8



An object moves along the x -axis with constant acceleration. The initial position x_0 is positive, the initial velocity is negative, and the acceleration is positive.

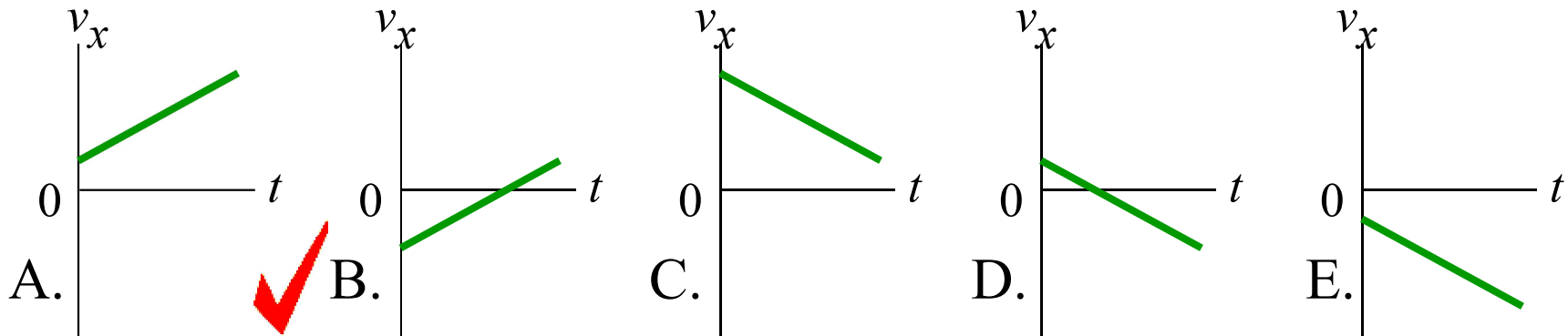
Which of the following v_x - t graphs best describes this motion?



A2.8

An object moves along the x -axis with constant acceleration. The initial position x_0 is positive, the initial velocity is negative, and the acceleration is positive.

Which of the following v_x - t graphs best describes this motion?



Q2.9



The position of an object moving along the x -axis is given by

$$x = (5.0 \text{ m/s})t - (10.0 \text{ m/s}^2)t^2 + (4.0 \text{ m/s}^3)t^3$$

What is the object doing at $t = 1.0 \text{ s}$?


- A. It is moving and speeding up
- B. It is moving and slowing down
- C. It is moving, but its velocity is not changing at this instant
- D. It is momentarily at rest
- E. Not enough information given to decide

A2.9

The position of an object moving along the x -axis is given by

$$x = (5.0 \text{ m/s})t - (10.0 \text{ m/s}^2)t^2 + (4.0 \text{ m/s}^3)t^3$$

What is the object doing at $t = 1.0 \text{ s}$?

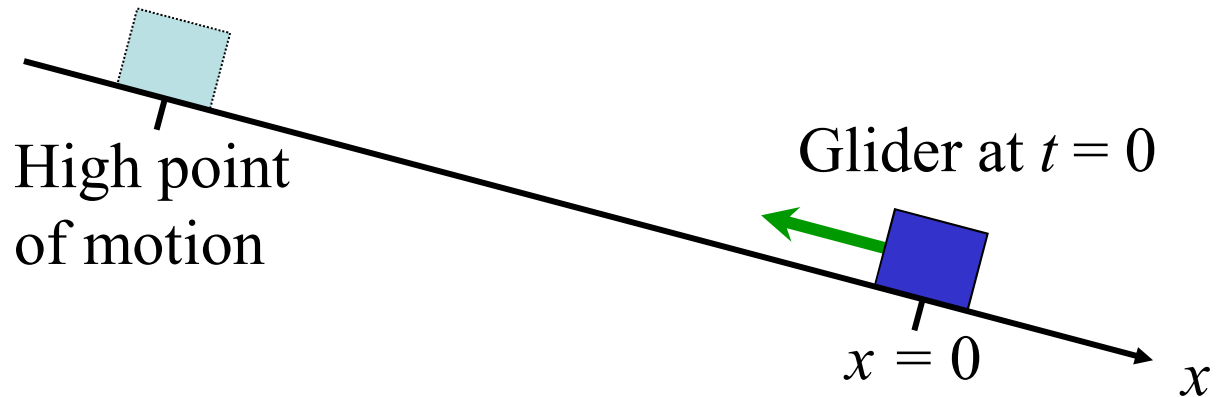
- A. It is moving and speeding up
-  B. It is moving and slowing down
- C. It is moving, but its velocity is not changing at this instant
- D. It is momentarily at rest
- E. Not enough information given to decide

Q2.10

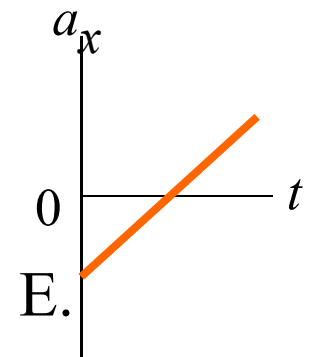
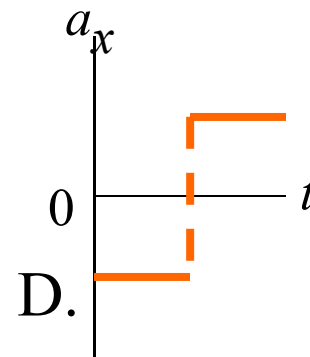
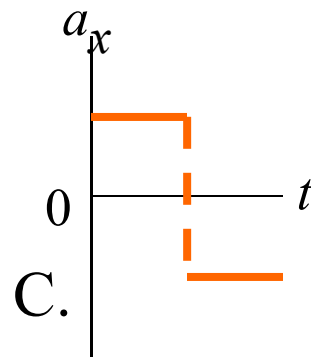
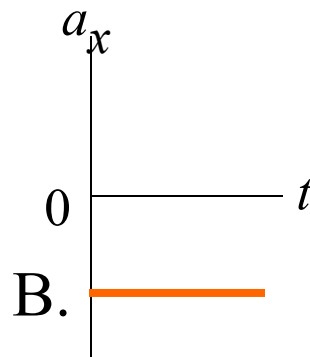
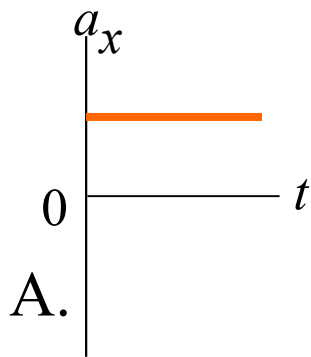


A glider is on an inclined, frictionless track. The x -axis points downhill. At $t = 0$ the glider is at $x = 0$ and moving uphill.

After reaching the high point of its motion, it moves downhill and returns to $x = 0$.



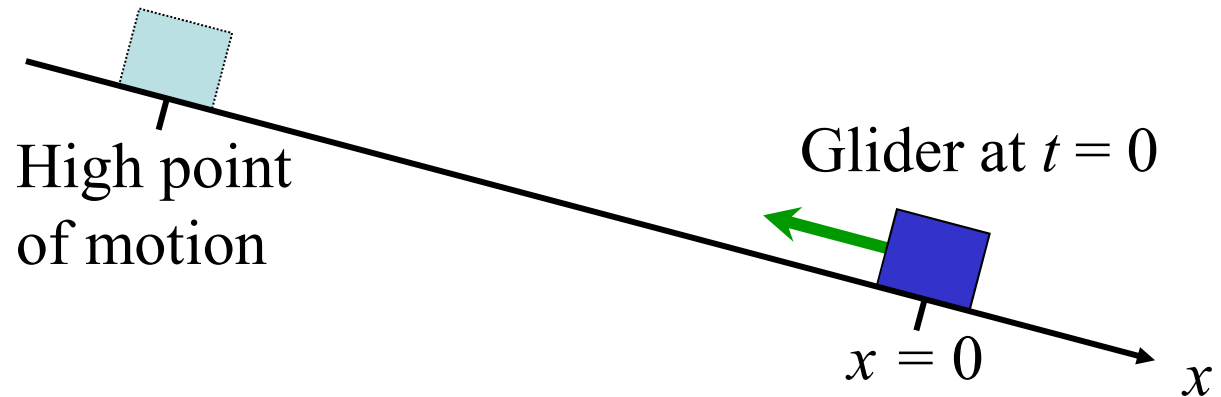
Which of the following a_x-t graphs (graphs of acceleration vs. time) best matches the motion of the glider?



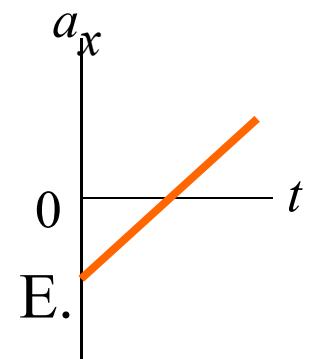
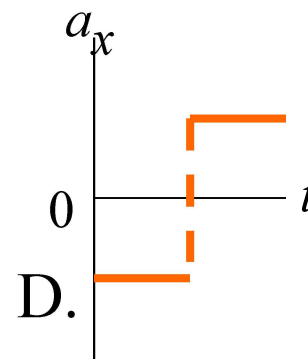
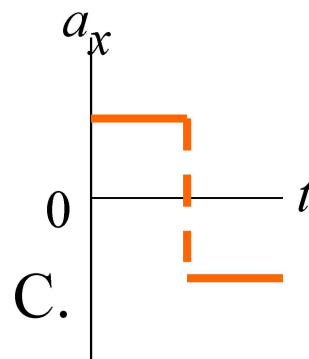
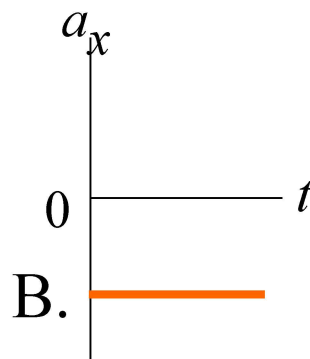
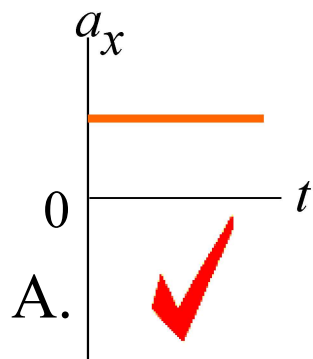
A2.10

A glider is on an inclined, frictionless track. The x -axis points downhill. At $t = 0$ the glider is at $x = 0$ and moving uphill.

After reaching the high point of its motion, it moves downhill and returns to $x = 0$.



Which of the following a_x-t graphs (graphs of acceleration vs. time) best matches the motion of the glider?

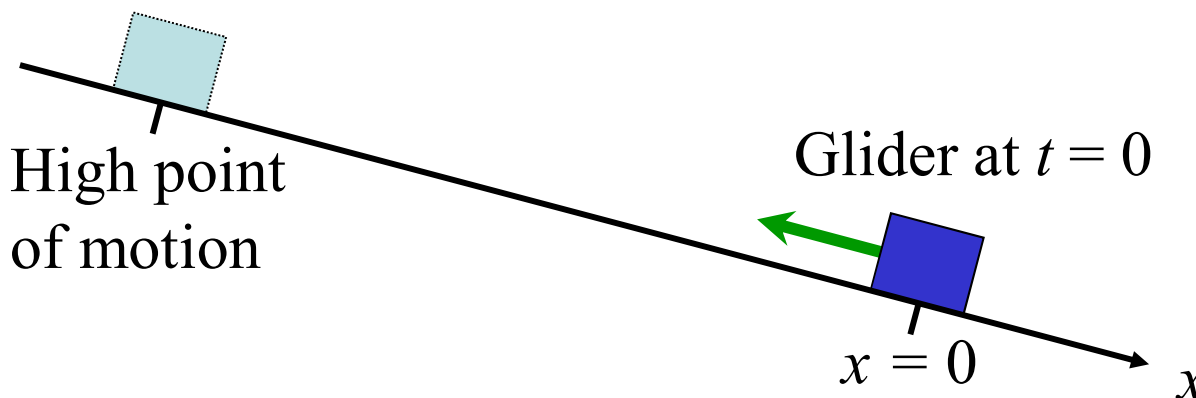


Q2.11

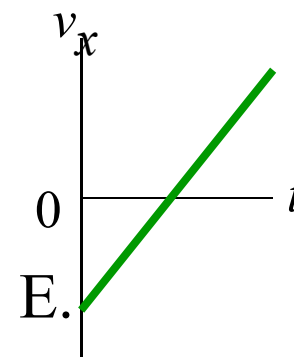
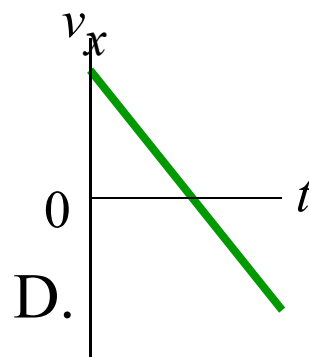
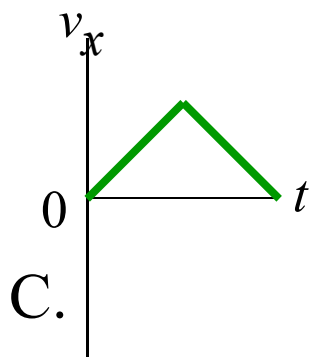
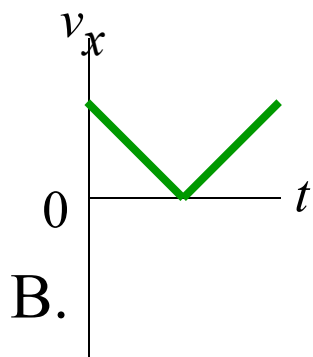
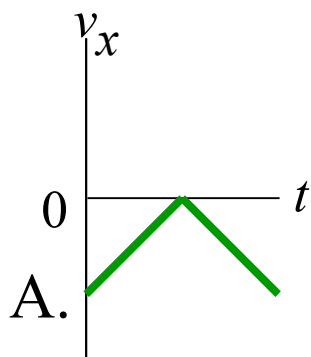


A glider is on an inclined, frictionless track. The x -axis points downhill. At $t = 0$ the glider is at $x = 0$ and moving uphill.

After reaching the high point of its motion, it moves downhill and returns to $x = 0$.



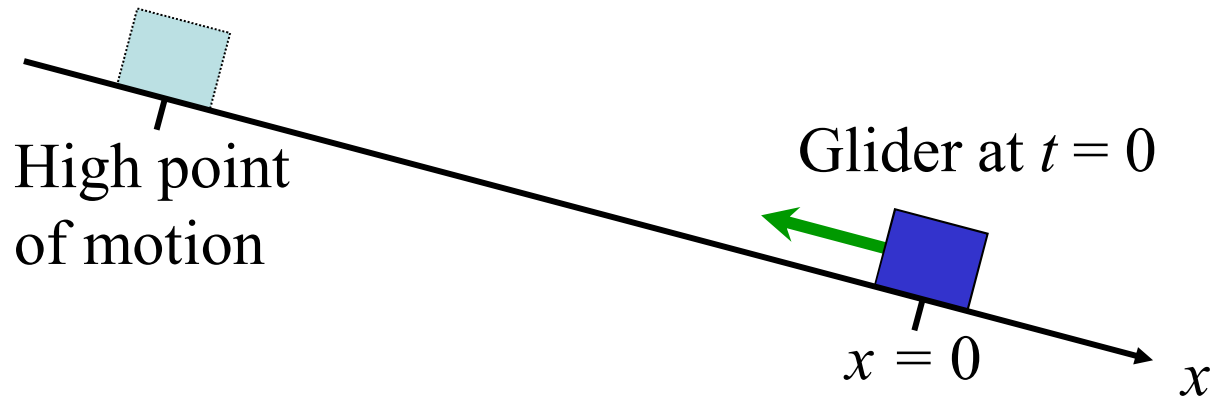
Which of the following v_x-t graphs (graphs of velocity vs. time) best matches the motion of the glider?



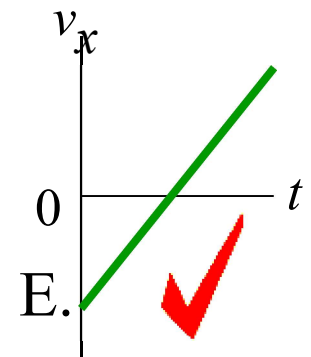
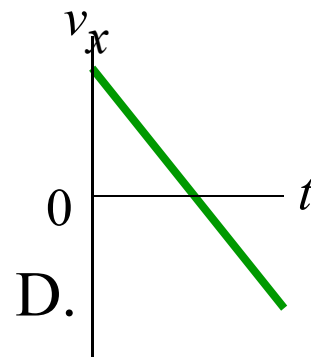
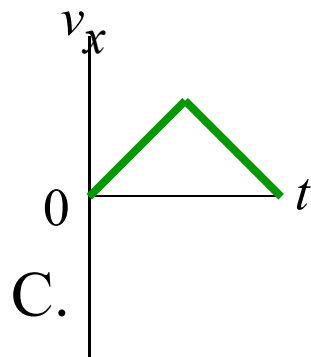
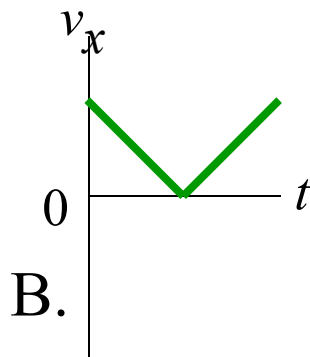
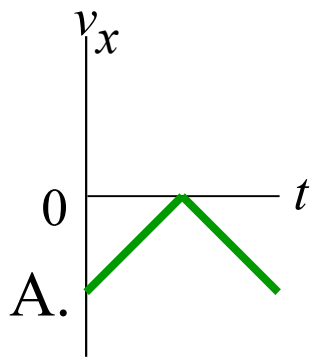
A2.11

A glider is on an inclined, frictionless track. The x -axis points downhill. At $t = 0$ the glider is at $x = 0$ and moving uphill.

After reaching the high point of its motion, it moves downhill and returns to $x = 0$.



Which of the following v_x-t graphs (graphs of velocity vs. time) best matches the motion of the glider?

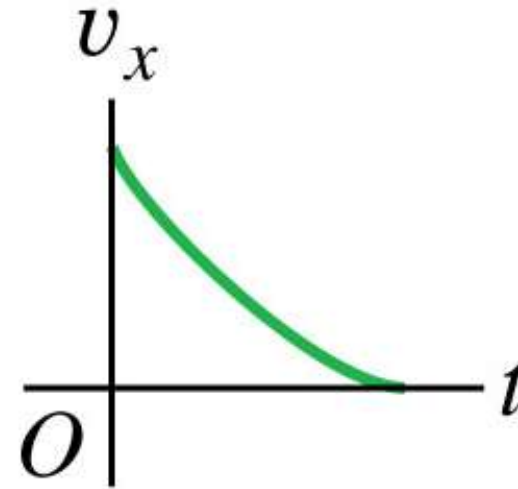


Q2.12



This is the v_x-t graph for an object moving along the x -axis.

Which of the following descriptions of the motion is most accurate?

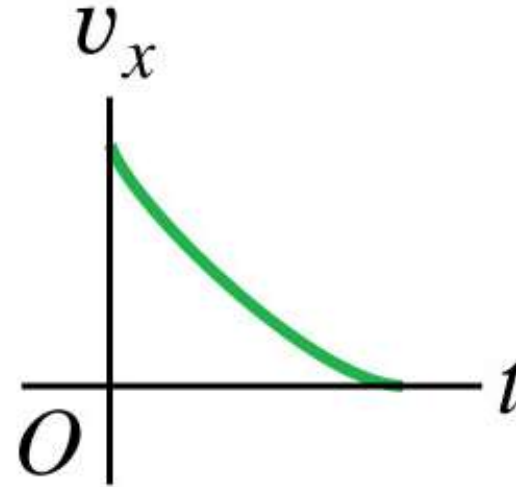


- A. The object is slowing down at a decreasing rate.
- B. The object is slowing down at an increasing rate.
- C. The object is speeding up at a decreasing rate.
- D. The object is speeding up at an increasing rate.
- E. The object's speed is changing at a steady rate.

A2.12

This is the v_x-t graph for an object moving along the x -axis.

Which of the following descriptions of the motion is most accurate?



- A. The object is slowing down at a decreasing rate.
- B. The object is slowing down at an increasing rate.
- ✓ C. The object is speeding up at a decreasing rate.
- D. The object is speeding up at an increasing rate.
- E. The object's speed is changing at a steady rate.

Q2.13




You are given the v_x-t graph for an object moving along the x -axis with constant acceleration. Which of the following could you *not* determine from the information given in this graph alone?

- A. the object's x -acceleration at any time t
- B. the object's x -velocity at any time t
- C. the object's position at any time t
- D. more than one of the above
- E. misleading question—you could determine all of these from the v_x-t graph alone

A2.13

You are given the v_x-t graph for an object moving along the x -axis with constant acceleration. Which of the following could you *not* determine from the information given in this graph alone?

- A. the object's x -acceleration at any time t
- B. the object's x -velocity at any time t
-  C. the object's position at any time t
- D. more than one of the above
- E. misleading question—you could determine all of these from the v_x-t graph alone

Q2.14



The position of an object moving along the x -axis is given by

$$x = 5.0 \text{ m} - (4.0 \text{ m/s})t + (2.0 \text{ m/s}^2)t^2$$

Which statement about this object is *correct*?


- A. For $t > 0$, the object is never at rest.
- B. The object is at rest at $t = 0.5 \text{ s}$.
- C. The object is at rest at $t = 1.0 \text{ s}$.
- D. The object is at rest at $t = 2.0 \text{ s}$.
- E. More than one of B, C, and D is correct.

A2.14

The position of an object moving along the x -axis is given by

$$x = 5.0 \text{ m} - (4.0 \text{ m/s})t + (2.0 \text{ m/s}^2)t^2$$

Which statement about this object is *correct*?

- A. For $t > 0$, the object is never at rest.
- B. The object is at rest at $t = 0.5 \text{ s}$.
-  C. The object is at rest at $t = 1.0 \text{ s}$.
- D. The object is at rest at $t = 2.0 \text{ s}$.
- E. More than one of B, C, and D is correct.

Q2.15



The position of an object moving along the x -axis is given by

$$x = 5.0 \text{ m} - (4.0 \text{ m/s})t + (2.0 \text{ m/s}^2)t^2$$

How many times does this object pass through the point $x = 0$?

- A. twice, first moving in the positive x -direction, then moving in the negative x -direction
- B. twice, first moving in the negative x -direction, then moving in the positive x -direction
- C. only once, moving in the positive x -direction
- D. only once, moving in the negative x -direction
- E. never

A2.15

The position of an object moving along the x -axis is given by

$$x = 5.0 \text{ m} - (4.0 \text{ m/s})t + (2.0 \text{ m/s}^2)t^2$$


How many times does this object pass through the point $x = 0$?

A. twice, first moving in the positive x -direction, then moving in the negative x -direction

B. twice, first moving in the negative x -direction, then moving in the positive x -direction

C. only once, moving in the positive x -direction

D. only once, moving in the negative x -direction

 E. never

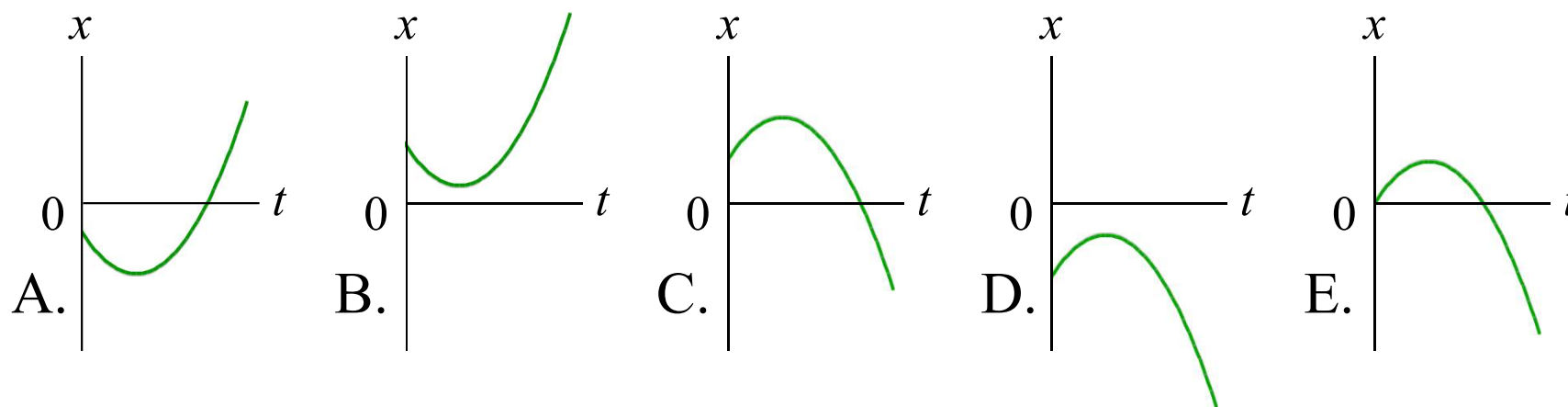
Q2.16



The position of an object moving along the x -axis is given by

$$x = 5.0 \text{ m} + (4.0 \text{ m/s})t - (2.0 \text{ m/s}^2)t^2$$

Which of the following $x-t$ graphs (graphs of position vs. time) is correct for this motion?

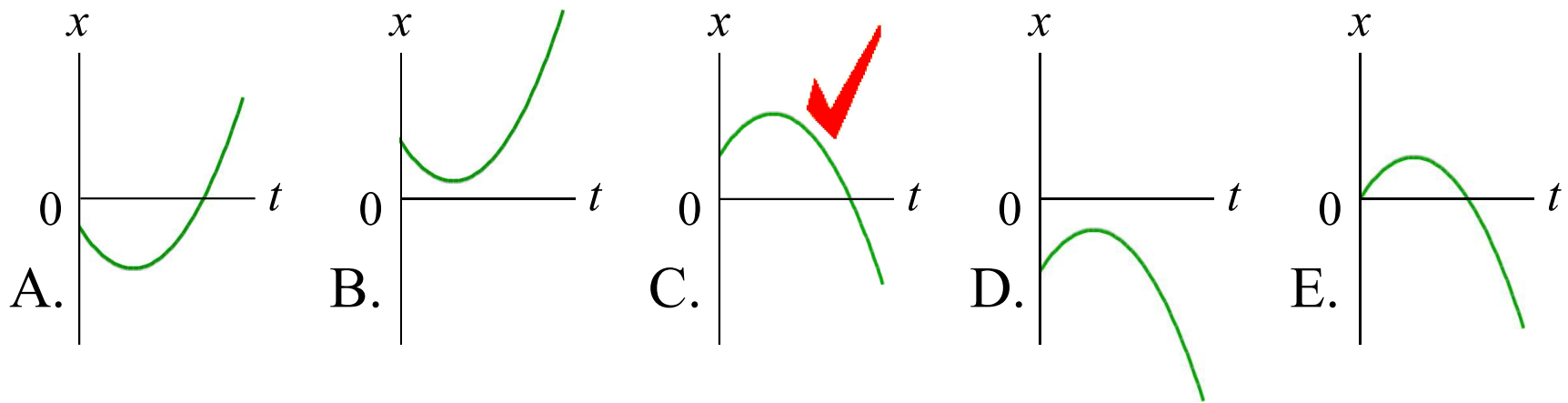


A2.16

The position of an object moving along the x -axis is given by

$$x = 5.0 \text{ m} + (4.0 \text{ m/s})t - (2.0 \text{ m/s}^2)t^2$$

Which of the following $x-t$ graphs (graphs of position vs. time) is correct for this motion?



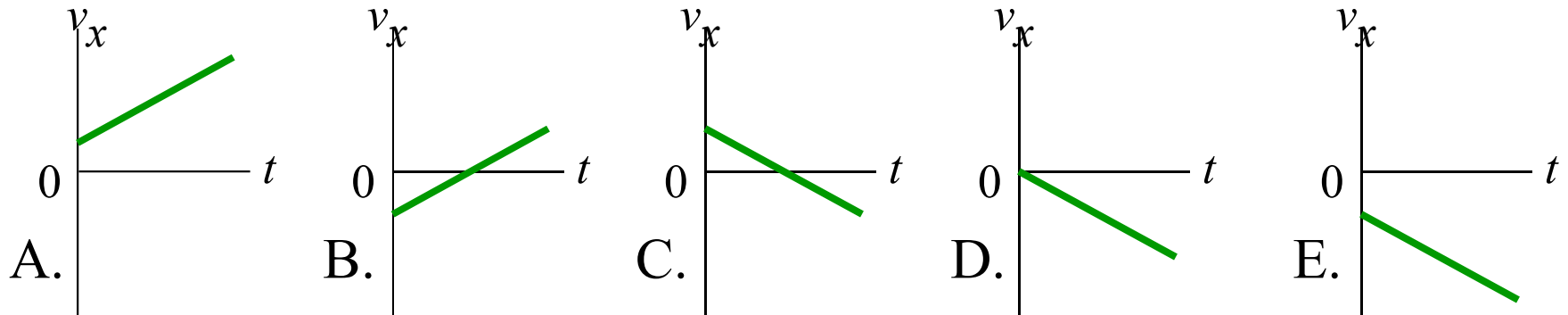
Q2.17



The position of an object moving along the x -axis is given by

$$x = 5.0 \text{ m} + (4.0 \text{ m/s})t - (2.0 \text{ m/s}^2)t^2$$

Which of the following v_x-t graphs (graphs of velocity vs. time) is correct for this motion?

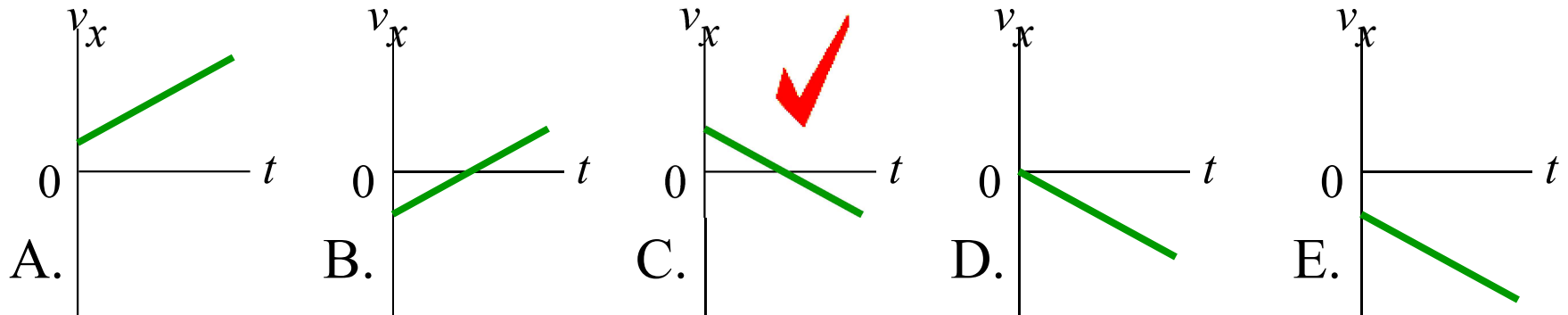


A2.17

The position of an object moving along the x -axis is given by

$$x = 5.0 \text{ m} + (4.0 \text{ m/s})t - (2.0 \text{ m/s}^2)t^2$$

Which of the following v_x-t graphs (graphs of velocity vs. time) is correct for this motion?



Q2.18



If you toss a ball upward with a certain initial speed, it falls freely and reaches a maximum height h .

By what factor must you increase the initial speed of the ball for it to reach a maximum height $3h$?

A. $\sqrt{3}$

B. 3

C. $3\sqrt{3}$

D. 9

E. 27

A2.18

If you toss a ball upward with a certain initial speed, it falls freely and reaches a maximum height h .

By what factor must you increase the initial speed of the ball for it to reach a maximum height $3h$?

 A. $\sqrt{3}$

B. 3

C. $3\sqrt{3}$

D. 9

E. 27