

Name _____

MATH 251 Final Exam Version B Fall 2017

Sections 515 P. Yasskin

Multiple Choice: (5 points each. No part credit.)

1-10	/50	13	/15
11	/5	14	/15
12	/20	Total	/105

1. A wire has the shape of the helix curve $\vec{r}(\theta) = (4 \cos \theta, 4 \sin \theta, 3\theta)$ for $0 \leq \theta \leq \pi$ and has linear density $\delta = 2y$. Find the total mass of the wire.

- a. 80
- b. 60
- c. 40
- d. 20
- e. 10

2. A wire has the shape of the helix curve $\vec{r}(\theta) = (4 \cos \theta, 4 \sin \theta, 3\theta)$ for $0 \leq \theta \leq \pi$ and has linear density $\delta = 2y$. Find the y -component of the center of mass of the wire.

- a. 80π
- b. $\frac{1}{80\pi}$
- c. 40π
- d. $\frac{1}{40\pi}$
- e. π

3. The spiral ramp shown at the right may be parametrized by

$$\vec{R}(r, \theta) = (r \cos \theta, r \sin \theta, \theta)$$

for $0 \leq r \leq 2$ and $0 \leq \theta \leq 2\pi$.

Find the total mass, if the surface density is

$$\delta = \sqrt{x^2 + y^2}$$

- a. $\frac{2\pi}{3}(5^{3/2} - 1)$
- b. $\frac{2\pi}{3}5^{3/2}$
- c. $\frac{2\pi}{3}(10^{3/2} - 1)$
- d. $\frac{2\pi}{3}10^{3/2}$
- e. $\frac{2\pi}{3}(10^{3/2} - 5^{3/2})$



4. Consider the spiral ramp described in the previous problem.

Find the flux of the vector field $\vec{F} = (0, 0, z)$ **upward** through the spiral ramp.

- a. $-9\pi^2$
- b. $-4\pi^2$
- c. 0
- d. $4\pi^2$
- e. $9\pi^2$

5. Compute $\int_A^B \vec{F} \cdot d\vec{s}$ for $\vec{F} = (2x + y, x + 2y)$ along the line segment from $A = (2, 1)$ to $B = (1, 3)$.

Hint: Find a scalar potential.

- a. 15
- b. 6
- c. 0
- d. -6
- e. -15

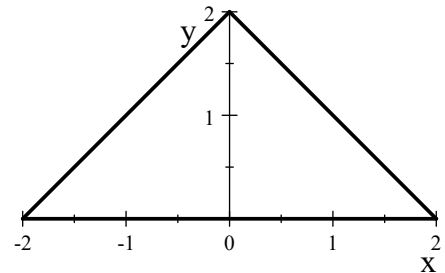
6. Compute $\int_A^B \vec{F} \cdot d\vec{s}$ for $\vec{F} = (-y, x, 3)$ along the helix $\vec{r}(\theta) = (3 \cos \theta, 3 \sin \theta, 4\theta)$ from $A = (3, 0, 0)$ to $B = (3, 0, 8\pi)$

- a. 0
- b. 40π
- c. 42π
- d. 44π
- e. 46π

7. Compute $\oint_{\partial T} (\sin x + 5y) dx + (2x + \cos y) dy$

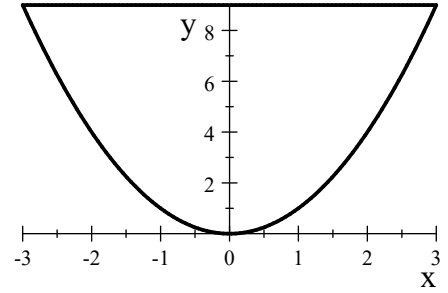
clockwise around the complete boundary of the triangle shown at the right.

Hint: Use a Theorem.



- a. 12
- b. 8
- c. 0
- d. -8
- e. -12

8. Compute $\oint \vec{F} \cdot d\vec{S}$ for $\vec{F} = (x^2y, 2x^3)$ along the piece of the parabola $y = x^2$ from $(-3, 9)$ to $(3, 9)$ followed by the line segment from $(3, 9)$ back to $(-3, 9)$.



Hint: Use Green's Theorem.

- a. 405
 b. 324
 c. 162
 d. 81
 e. 0
9. Compute $\iint_{\partial C} \vec{F} \cdot d\vec{S}$ over the complete surface of the cylinder $x^2 + y^2 \leq 9$ for $0 \leq z \leq 4$ oriented out from the cylinder for $\vec{F} = (xz, yz, z^2)$.

Hint: Use Gauss' Theorem.

- a. 24π
 b. 36π
 c. 72π
 d. 144π
 e. 288π

10. Sketch the region of integration for the integral $\int_0^2 \int_{x^2}^4 x \cos(y^2) dy dx$ in problem (11).

Select its value here:

- a. $\frac{1}{4} \sin 2$
- b. $\frac{1}{4} \sin 4$
- c. $\frac{1}{2} \sin 4$
- d. $\frac{1}{4} \sin 16$
- e. $\frac{1}{2} \sin 16$

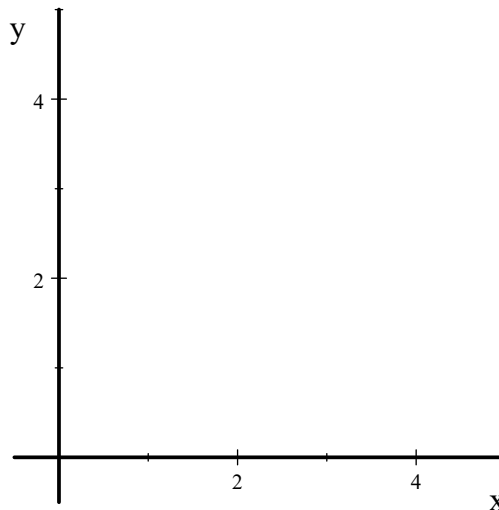
Work Out: (Points indicated. Part credit possible. Show all work.)

11. (5 points) Sketch the region of integration

for the integral $\int_0^2 \int_{x^2}^4 x \cos(y^2)$.

Shade in the region.

Compute its value in problem (10).



12. (20 points) Verify Stokes' Theorem $\iint_P \vec{\nabla} \times \vec{F} \cdot d\vec{S} = \oint_{\partial P} \vec{F} \cdot d\vec{s}$

for the vector field $\vec{F} = (-yz, xz, z^2)$ and the **surface** which is the piece of the paraboloid P given by $z = x^2 + y^2$ between $z = 1$ and $z = 9$ oriented up and in.

Notice that the boundary of P is two circles.

Be sure to check orientations. Use the following steps:

- a. The paraboloid may be parametrized by $\vec{R}(r, \theta) = (r \cos \theta, r \sin \theta, r^2)$ for $1 \leq r \leq 3$.



$$\vec{e}_r =$$

$$\vec{e}_\theta =$$

$$\vec{N} =$$

(Check the orientation)

$$\vec{\nabla} \times \vec{F} =$$

$$\vec{\nabla} \times \vec{F} \Big|_{\vec{R}(r, \theta)} =$$

$$\vec{\nabla} \times \vec{F} \cdot \vec{N} =$$

$$\iint_P \vec{\nabla} \times \vec{F} \cdot d\vec{S} =$$

Recall $\vec{F} = (-yz, xz, z^2)$

- b. Parametrize the upper circle U and compute the line integral.

$$\vec{r}(\theta) =$$

$$\vec{v}(\theta) =$$

(Check the orientation)

$$\vec{F}|_{\vec{r}(\theta)} =$$

$$\oint_U \vec{F} \cdot d\vec{s} =$$

- c. Parametrize the lower circle L and compute the line integral.

$$\vec{r}(\theta) =$$

$$\vec{v}(\theta) =$$

(Check the orientation)

$$\vec{F}|_{\vec{r}(\theta)} =$$

$$\oint_L \vec{F} \cdot d\vec{s} =$$

- d. Combine $\oint_U \vec{F} \cdot d\vec{s}$ and $\oint_L \vec{F} \cdot d\vec{s}$ to get $\oint_{\partial C} \vec{F} \cdot d\vec{s}$.

13. (15 points) (Also replaces Exam 3 #12.)

Find the mass of the solid between the hemispheres

$$z = \sqrt{4 - x^2 - y^2} \quad \text{and} \quad z = \sqrt{9 - x^2 - y^2}$$

for $z \geq 0$ if the density is $\delta = \frac{1}{x^2 + y^2 + z^2}$.



14. (15 points) (Also replaces Exam 3 #13.)

Find the **centroid** of the **solid** inside

the paraboloid $z = x^2 + y^2$ for $1 \leq z \leq 2$.

Hint: Put the differentials in the order $dr dz d\theta$.

